


Impulse and Momentum

AP Physics B



Impulse = Momentum

Consider Newton's 2nd Law and the definition of acceleration

Impulse-Momentum Theorem

$$J = \Delta p$$

$$Ft = \Delta mv$$

Units of Impulse: **Ns**

Units of Momentum: **Kg x m/s**

Momentum is defined as “Inertia in Motion”

$$\frac{F_{Net}}{m} = a, \quad a = \frac{\Delta v}{t}$$

$$\frac{F_{Net}}{m} = \frac{\Delta v}{t} \rightarrow Ft = \Delta mv$$

$$Ft = \text{Impulse}(J)$$

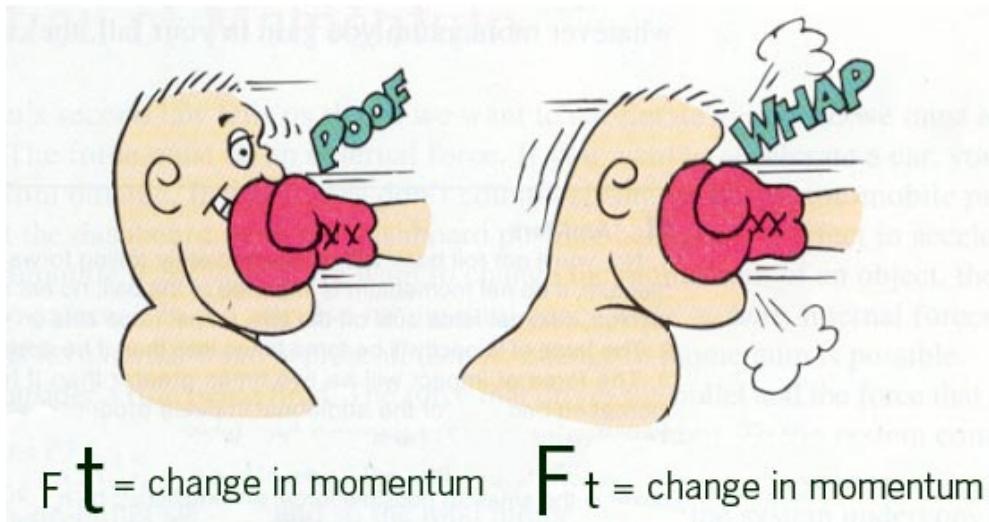
$$\Delta mv = \text{Momentum}(p)$$

Impulse – Momentum Theorem

$$Ft = m\Delta v$$

IMPULSE

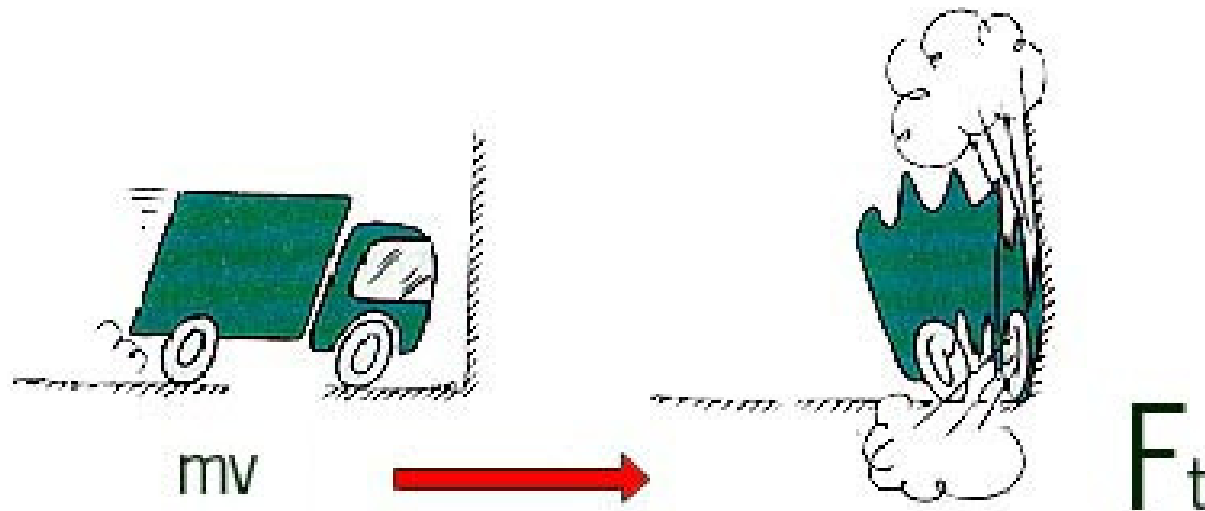
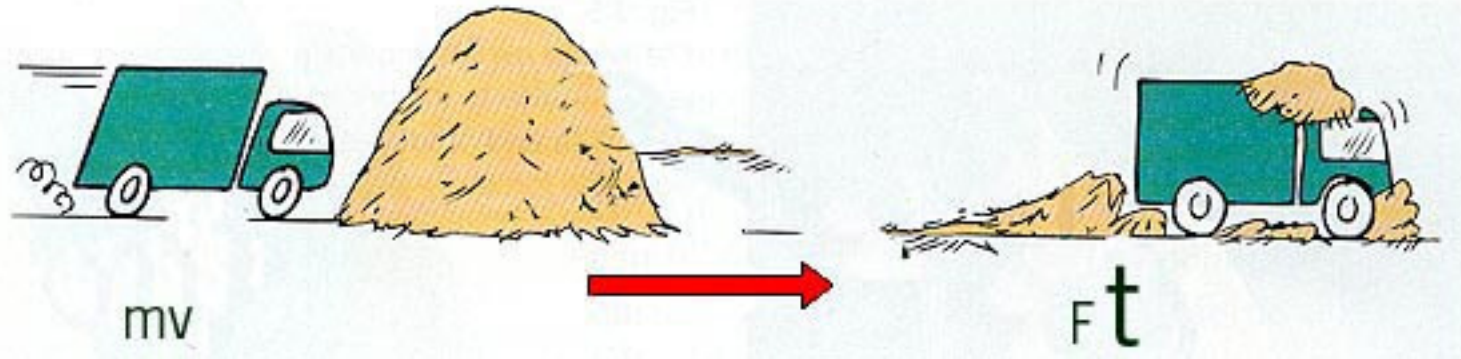
CHANGE IN MOMENTUM



This theorem reveals some interesting relationships such as the INVERSE relationship between FORCE and TIME

$$F = \frac{m\Delta v}{t}$$

Impulse – Momentum Relationships



Impulse – Momentum Relationships

FOR THE SAME FORCE,
WHY IS THE SPEED OF A
CANNONBALL GREATER
WHEN SHOT FROM A
CANNON WITH A
LONGER BARREL?



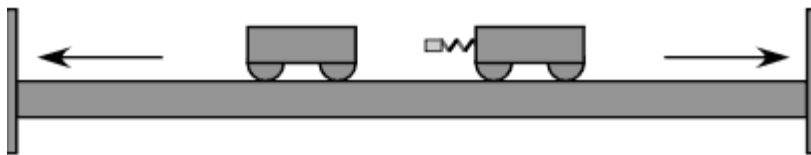
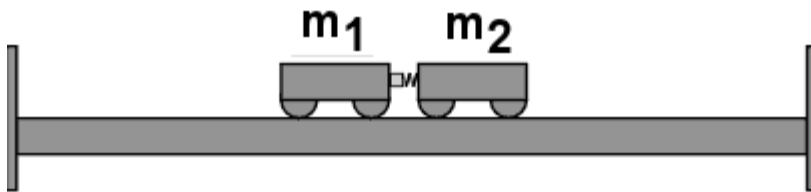
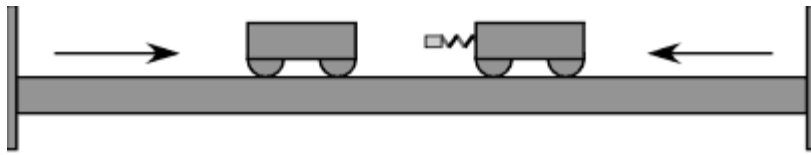
$$fT = m\Delta V$$

Constant

Since TIME is directly related to the VELOCITY when the force and mass are constant, the LONGER the cannonball is in the barrel the greater the velocity.

Also, you could say that the force acts over a larger displacement, thus there is more WORK. The work done on the cannonball turns into kinetic energy.

How about a collision?



$$F_1 = -F_2 \quad t_1 = t_2$$

$$(Ft)_1 = -(Ft)_2$$

$$J_1 = -J_2$$

Consider 2 objects speeding toward each other. When they collide.....

Due to Newton's 3rd Law the FORCE they exert on each other are EQUAL and OPPOSITE.

The TIMES of impact are also equal.

Therefore, the IMPULSES of the 2 objects colliding are also EQUAL

How about a collision?

If the Impulses are equal then
the MOMENTUMS are
also equal!

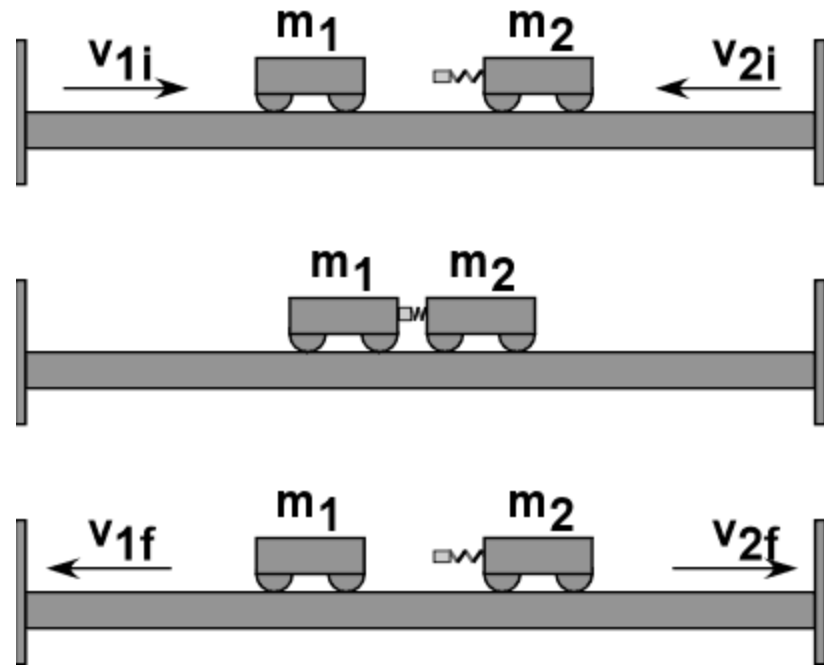
$$J_1 = -J_2$$

$$p_1 = -p_2$$

$$m_1 \Delta v_1 = -m_2 \Delta v_2$$

$$m_1 (v_1 - v_{o1}) = -m_2 (v_2 - v_{o2})$$

$$m_1 v_1 - \overbrace{m_1 v_{o1}}^{\rightarrow} = \overbrace{-m_2 v_2}^{\leftarrow} + m_2 v_{o2}$$

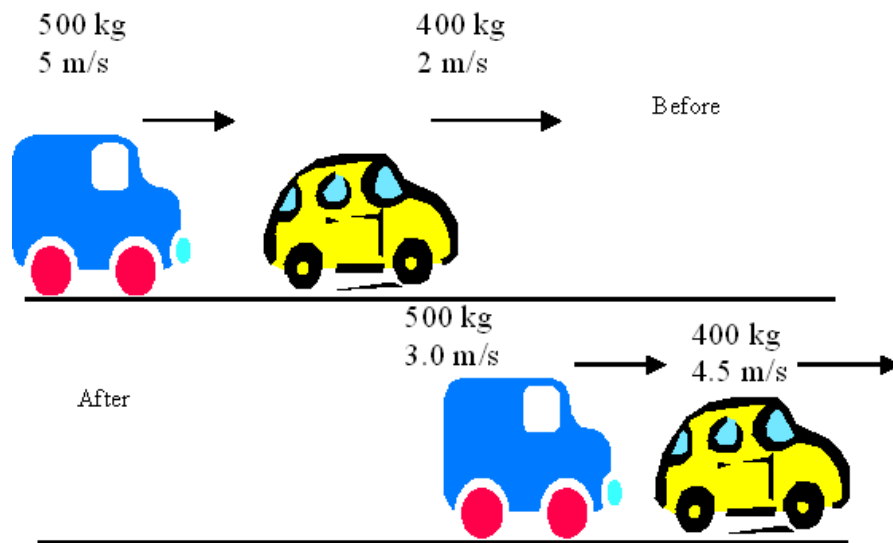


$$\sum p_{before} = \sum p_{after}$$

$$m_1 v_{o1} + m_2 v_{o2} = m_1 v_1 + m_2 v_2$$

Momentum is conserved!

The Law of Conservation of Momentum: *“In the absence of an external force (gravity, friction), the total momentum before the collision is equal to the total momentum after the collision.”*



$$p_{o(truck)} = mv_o = (500)(5) = 2500\text{kg} * m / s$$

$$p_{o(car)} = (400)(2) = 800\text{kg} * m / s$$

$$p_{o(total)} = 3300\text{kg} * m / s$$

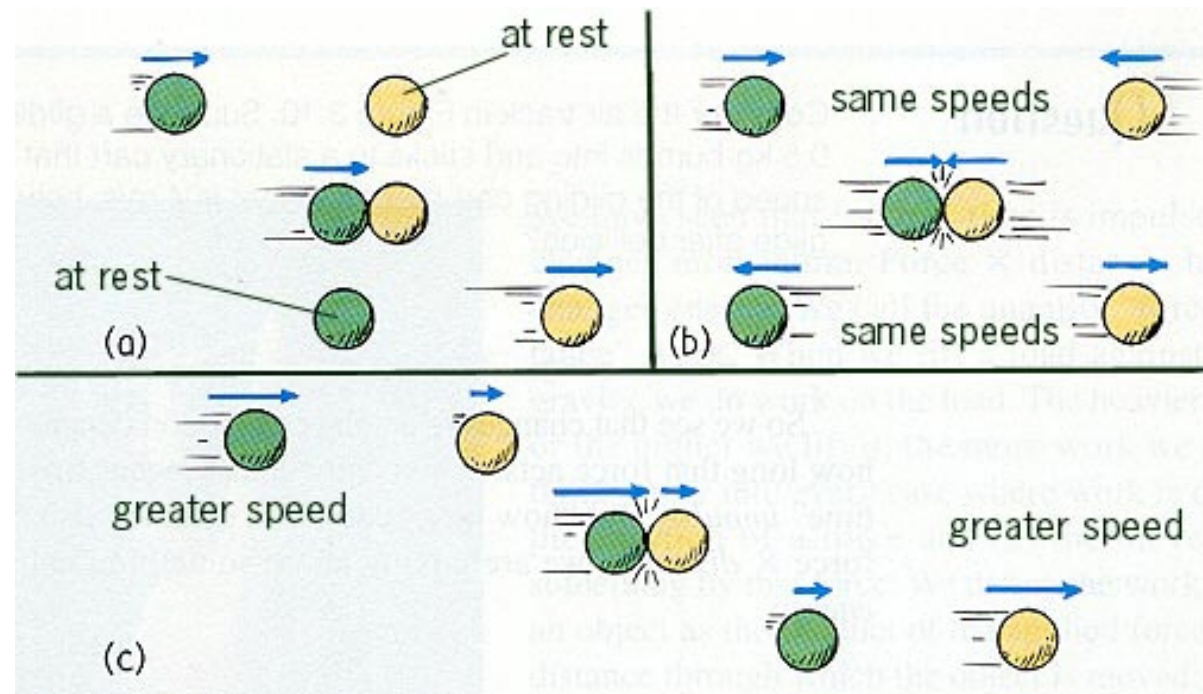
$$p_{truck} = 500 * 3 = 1500\text{kg} * m / s$$

$$p_{car} = 400 * 4.5 = 1800\text{kg} * m / s$$

$$p_{total} = 3300\text{kg} * m / s$$

Types of Collisions


A situation where the objects DO NOT STICK is one type of collision



Notice that in EACH case, you have TWO objects BEFORE and AFTER the collision.

A “no stick” type collision

Car		Truck	
mass (kg)	1000	mass (kg)	3000
vel. (m/s)	20.0	vel. (m/s)	0.0
mom. (kg m/s)	20 000	mom. (kg m/s)	0




A diagram showing a car and a truck on a road. The car is on the left, and the truck is on the right. A red sign on the truck says "MOMENTUM TRANSFER".

$$\begin{array}{r|l} \Sigma p_{\text{before}} & = & \Sigma p_{\text{after}} \\ \hline m_1 v_{o1} + m_2 v_{o2} & = & m_1 v_1 + m_2 v_2 \\ (1000)(20) + 0 & = & (1000)(v_1) + (3000)(10) \\ -10000 & = & 1000v_1 \\ v_1 = & \mathbf{-10 \text{ m/s}} & \end{array}$$


Types of Collisions

Another type of collision is one where the objects “STICK” together. Notice you have TWO objects before the collision and ONE object after the collision.



A “stick” type of collision


Car		Truck	
mass (kg)	1000	mass (kg)	3000
vel. (m/s)	20.0	vel. (m/s)	0.0
mom. (kg m/s)	20 000	mom. (kg m/s)	0



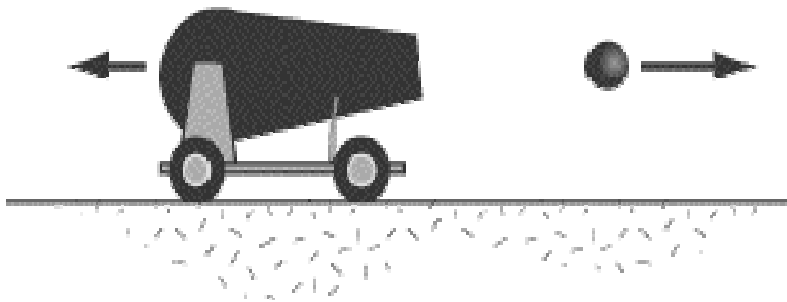
$$\begin{array}{r|l} \Sigma p_{\text{before}} & = \Sigma p_{\text{after}} \\ \hline m_1 v_{o1} + m_2 v_{o2} & = m_T v_T \\ (1000)(20) + 0 & = (4000)v_T \\ 20000 & = 4000v_T \\ v_T = & \mathbf{5 \text{ m/s}} \end{array}$$

The “explosion” type

before

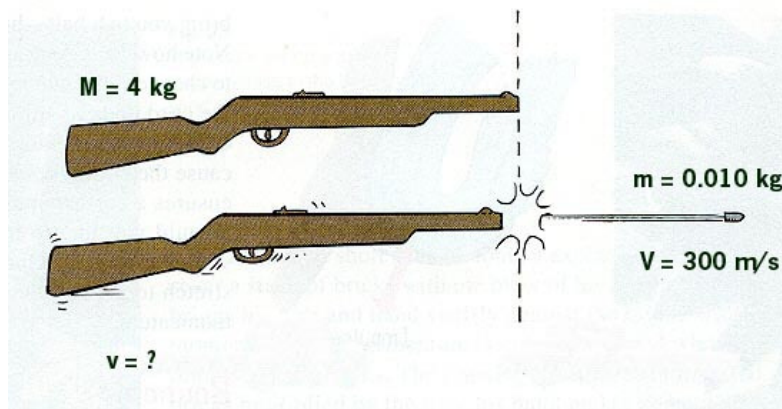


after



This type is often referred to as “backwards inelastic”. Notice you have ONE object (we treat this as a SYSTEM) before the explosion and TWO objects after the explosion.

Backwards Inelastic - Explosions



Suppose we have a 4-kg rifle loaded with a 0.010 kg bullet. When the rifle is fired the bullet exits the barrel with a velocity of 300 m/s. How fast does the gun RECOIL backwards?

$$\begin{array}{r|l} \Sigma p_{\text{before}} & = \Sigma p_{\text{after}} \\ \hline m_T v_T & = m_1 v_1 + m_2 v_2 \\ (4.010)(0) & = (0.010)(300) + (4)(v_2) \\ 0 & = 3 + 4v_2 \\ v_2 & = \mathbf{-0.75 \text{ m/s}} \end{array}$$

Collision Summary

Sometimes objects stick together or blow apart. In this case, momentum is ALWAYS conserved.

$$\sum p_{\text{before}} = \sum p_{\text{after}}$$

$$m_1 v_{01} + m_2 v_{02} = m_1 v_1 + m_2 v_2 \longrightarrow \text{When 2 objects collide and DON'T stick}$$

$$m_1 v_{01} + m_2 v_{02} = m_{\text{total}} v_{\text{total}} \longrightarrow \text{When 2 objects collide and stick together}$$


$$m_{\text{total}} v_{o(\text{total})} = m_1 v_1 + m_2 v_2 \longrightarrow \text{When 1 object breaks into 2 objects}$$

Elastic Collision = Kinetic Energy **is** Conserved

Inelastic Collision = Kinetic Energy is **NOT** Conserved

Elastic Collision

Car		Truck	
mass (kg)	1000	mass (kg)	3000
vel. (m/s)	20.0	vel. (m/s)	0.0
mom. (kg m/s)	20 000	mom. (kg m/s)	0



The diagram shows a car on the left and a truck on the right on a road. The truck is carrying a large red sign that says "MOMENTUM TRANSFER".

$$KE_{car} (Before) = \frac{1}{2}mv^2 = 0.5(1000)(20)^2 = 200,000J$$


$$KE_{truck} (After) = 0.5(3000)(10)^2 = 150,000J$$

$$KE_{car} (After) = 0.5(1000)(-10)^2 = 50,000J$$

Since KINETIC ENERGY is conserved during the collision we call this an **ELASTIC COLLISION**.

Inelastic Collision

Car		Truck	
mass (kg)	1000	mass (kg)	3000
vel. (m/s)	20.0	vel. (m/s)	0.0
mom. (kg m/s)	20 000	mom. (kg m/s)	0



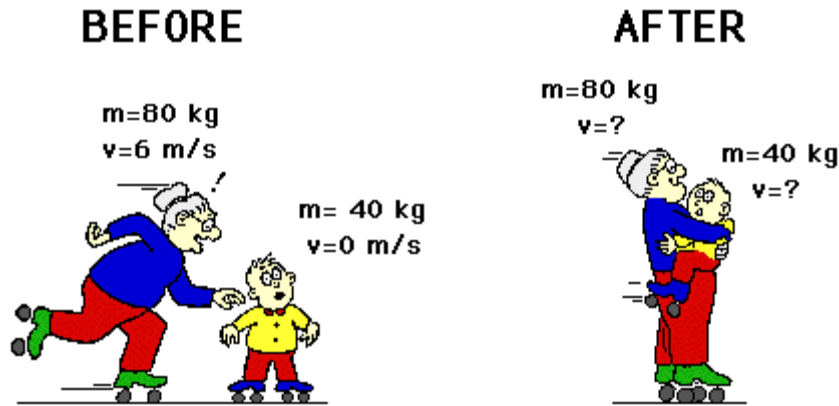
The diagram shows a red car on the left and a grey truck on the right on a road. A red sign on the truck reads "MOMENTUM TRANSFER".

$$KE_{car} (Before) = \frac{1}{2}mv^2 = 0.5(1000)(20)^2 = 200,000J$$

$$KE_{truck/car} (After) = 0.5(4000)(5)^2 = 50,000J$$

Since KINETIC ENERGY was NOT conserved during the collision we call this an **INELASTIC COLLISION**.

Example



Granny ($m=80$ kg) whizzes around the rink with a velocity of 6 m/s. She suddenly collides with Ambrose ($m=40$ kg) who is at rest directly in her path. Rather than knock him over, she picks him up and continues in motion without "braking." Determine the velocity of Granny and Ambrose.

How many objects do I have before the collision?

2

How many objects do I have after the collision?

1

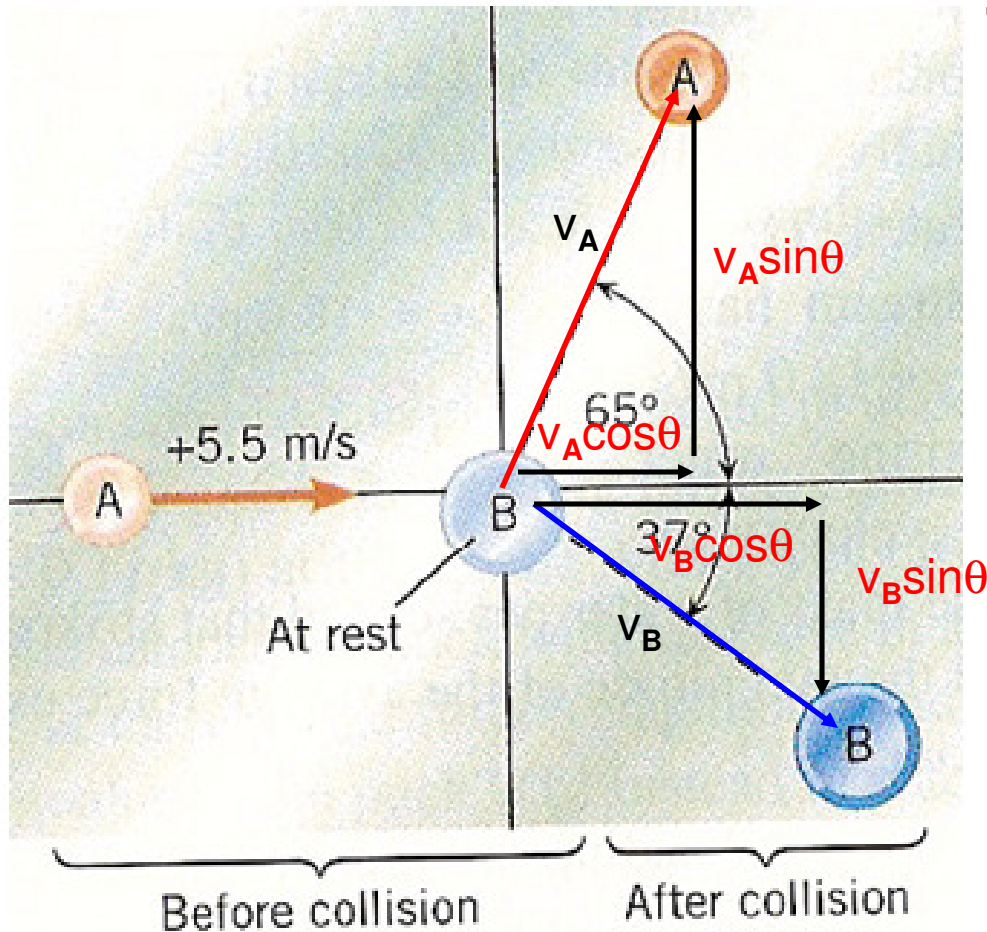
$$\sum p_b = \sum p_a$$

$$m_1 v_{o1} + m_2 v_{o2} = m_T v_T$$

$$(80)(6) + (40)(0) = 120v_T$$

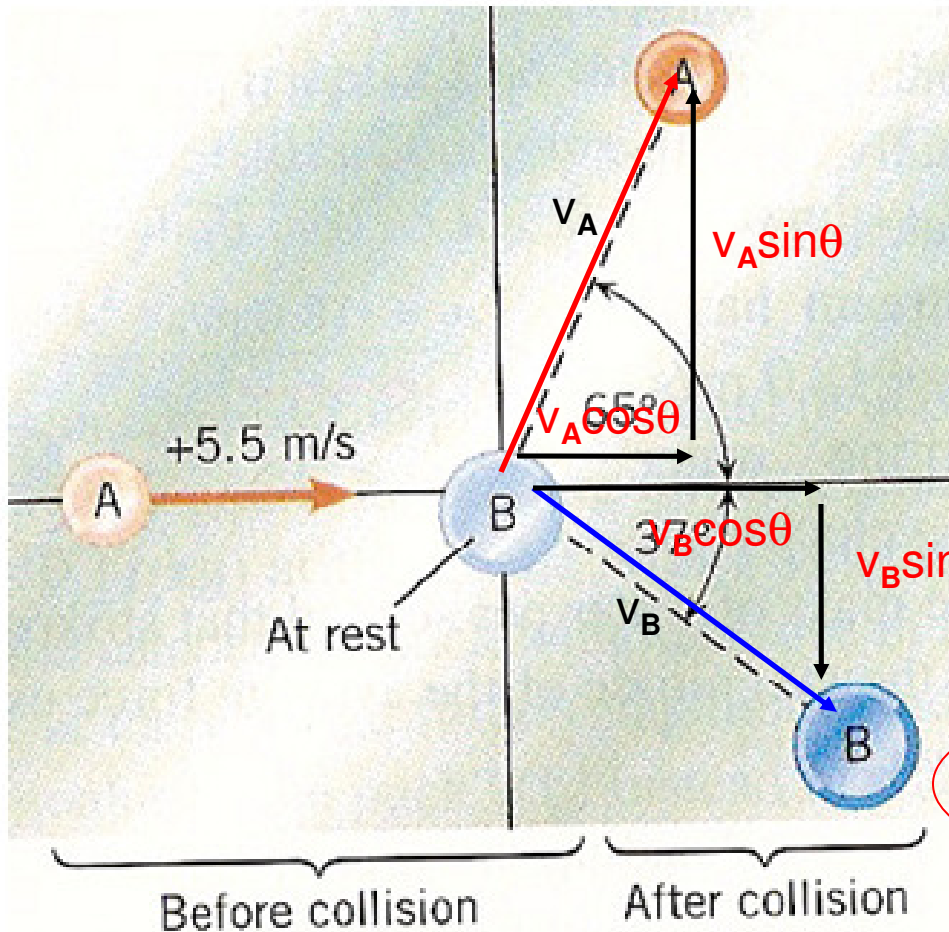
$$v_T = 4 \text{ m/s}$$

Collisions in 2 Dimensions



The figure to the left shows a collision between two pucks on an air hockey table. Puck A has a mass of 0.025-kg and is moving along the x-axis with a velocity of $+5.5 \text{ m/s}$. It makes a collision with puck B, which has a mass of 0.050-kg and is initially at rest. The collision is NOT head on. After the collision, the two pucks fly apart with angles shown in the drawing. Calculate the speeds of the pucks after the collision.

Collisions in 2 dimensions



$$\sum p_{ox} = \sum p_x$$

$$m_A v_{oxA} + m_B v_{oxB} = m_A v_{xA} + m_B v_{xB}$$

$$(0.025)(5.5) + 0 = (0.025)(v_A \cos 65) + (0.050)(v_B \cos 37)$$

$$0.1375 = 0.0106v_A + 0.040v_B$$

$$\sum p_{oy} = \sum p_y$$

$$0 = m_A v_{yA} + m_B v_{yB}$$

$$0 = (0.025)(v_A \sin 65) + (0.050)(-v_B \sin 37)$$

$$0.0300v_B = 0.0227v_A$$

$$v_B = 0.757v_A$$

Collisions in 2 dimensions

$$0.1375 = 0.0106v_A + 0.040v_B$$

$$v_B = 0.757v_A$$

$$0.1375 = 0.0106v_A + (0.050)(0.757v_A)$$

$$0.1375 = 0.0106v_A + 0.03785v_A$$

$$0.1375 = 0.04845v_A$$

$$v_A = 2.84m/s$$

$$v_B = 0.757(2.84) = 2.15m/s$$